

2D 1.1

Name the shapes. Count how many pairs of parallel lines each shape has.

a.



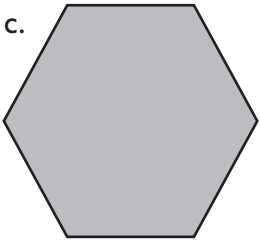
___ pairs of parallel lines

b.



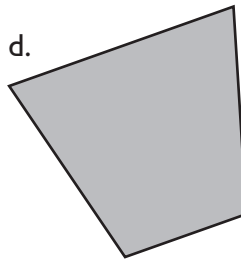
___ pairs of parallel lines

c.



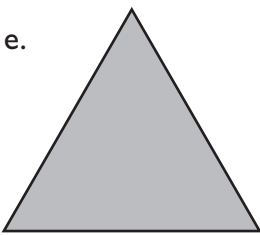
___ pairs of parallel lines

d.



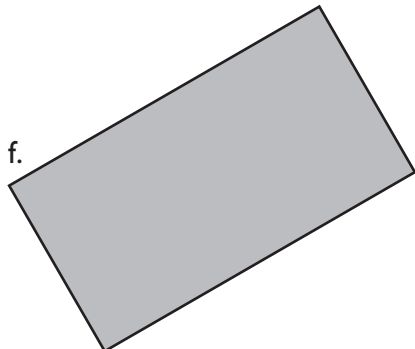
___ pairs of parallel lines

e.



___ pairs of parallel lines

f.



___ pairs of parallel lines